


Please check the examination details below before entering your candidate information

Candidate surname					Other names				
Pearson Edexcel		Centre Number			Candidate Number				
International GCSE		<input type="text"/> <input type="text"/> <input type="text"/> <input type="text"/> <input type="text"/>			<input type="text"/> <input type="text"/> <input type="text"/> <input type="text"/> <input type="text"/>				
Monday 15 June 2020									
Afternoon (Time: 2 hours)					Paper Reference 4PM1/01R				
Further Pure Mathematics									
Paper 1R									
Calculators may be used.								Total Marks	

Instructions

- Use **black** ink or ball-point pen.
- **Fill in the boxes** at the top of this page with your name, centre number and candidate number.
- Answer **all** questions.
- Without sufficient working, correct answers may be awarded no marks.
- Answer the questions in the spaces provided
– *there may be more space than you need.*
- You must **NOT** write anything on the formulae page.
Anything you write on the formulae page will gain NO credit.

Information

- The total mark for this paper is 100.
- The marks for **each** question are shown in brackets
– *use this as a guide as to how much time to spend on each question.*

Advice

- Read each question carefully before you start to answer it.
- Check your answers if you have time at the end.

Turn over ►

P62283A

©2020 Pearson Education Ltd.

1/1/1/1/1/




Pearson

International GCSE in Further Pure Mathematics Formulae sheet

MensurationSurface area of sphere = $4\pi r^2$ Curved surface area of cone = $\pi r \times$ slant heightVolume of sphere = $\frac{4}{3}\pi r^3$ **Series****Arithmetic series**Sum to n terms, $S_n = \frac{n}{2}[2a + (n-1)d]$ **Geometric series**Sum to n terms, $S_n = \frac{a(1-r^n)}{(1-r)}$ Sum to infinity, $S_\infty = \frac{a}{1-r}$ $|r| < 1$ **Binomial series** $(1+x)^n = 1 + nx + \frac{n(n-1)}{2!}x^2 + \dots + \frac{n(n-1)\dots(n-r+1)}{r!}x^r + \dots$ for $|x| < 1, n \in \mathbb{Q}$ **Calculus****Quotient rule (differentiation)**

$$\frac{d}{dx} \left(\frac{f(x)}{g(x)} \right) = \frac{f'(x)g(x) - f(x)g'(x)}{[g(x)]^2}$$

Trigonometry**Cosine rule**In triangle ABC : $a^2 = b^2 + c^2 - 2bc \cos A$

$$\tan \theta = \frac{\sin \theta}{\cos \theta}$$

$$\sin(A+B) = \sin A \cos B + \cos A \sin B$$

$$\sin(A-B) = \sin A \cos B - \cos A \sin B$$

$$\cos(A+B) = \cos A \cos B - \sin A \sin B$$

$$\cos(A-B) = \cos A \cos B + \sin A \sin B$$

$$\tan(A+B) = \frac{\tan A + \tan B}{1 - \tan A \tan B}$$

$$\tan(A-B) = \frac{\tan A - \tan B}{1 + \tan A \tan B}$$

Logarithms

$$\log_a x = \frac{\log_b x}{\log_b a}$$

DO NOT WRITE IN THIS AREA

DO NOT WRITE IN THIS AREA

DO NOT WRITE IN THIS AREA



Answer all TWELVE questions.

Write your answers in the spaces provided.

You must write down all the stages in your working.

1 Here is a formula

$$P = 3 + 2 \sin \left(\frac{3\pi t}{8} \right) \quad 0 \leq t \leq 12$$

(a) Find the exact value of P when $t = \frac{10}{3}$ (2)

(b) Find

(i) the largest value of P

(ii) the smallest value of P (2)

(c) Find the least value of t for which $P = 4$ (3)

.....

.....

.....

.....

.....

.....

.....

.....

.....

.....

.....

.....

.....

.....

.....

.....

.....

.....

.....

.....

.....

.....

.....

.....

DO NOT WRITE IN THIS AREA

DO NOT WRITE IN THIS AREA

DO NOT WRITE IN THIS AREA



Question 1 continued

Area with horizontal dotted lines for writing.

DO NOT WRITE IN THIS AREA

DO NOT WRITE IN THIS AREA

DO NOT WRITE IN THIS AREA



Question 1 continued

DO NOT WRITE IN THIS AREA

DO NOT WRITE IN THIS AREA

DO NOT WRITE IN THIS AREA

Area with horizontal dotted lines for writing.

(Total for Question 1 is 7 marks)



- 2 (a) Express $x^2 + 4x - 8$ in the form $(x + a)^2 + b$ where a and b are constants whose values are to be found. (2)

- (b) Use algebra to solve the simultaneous equations

$$y = x^2 + 4x - 8$$

$$y = 2x + 7$$

(5)

The curve C has equation $y = x^2 + 4x - 8$

The straight line L has equation $y = 2x + 7$

Using the same axes and the results of part (a) and part (b),

- (c) sketch C and L , showing clearly the coordinates of the turning point of C and the coordinates of the points of intersection of C and L . (4)

DO NOT WRITE IN THIS AREA

DO NOT WRITE IN THIS AREA

DO NOT WRITE IN THIS AREA



Question 2 continued

DO NOT WRITE IN THIS AREA

DO NOT WRITE IN THIS AREA

DO NOT WRITE IN THIS AREA

Area with horizontal dotted lines for writing.



Question 2 continued

Area with horizontal dotted lines for writing.

DO NOT WRITE IN THIS AREA

DO NOT WRITE IN THIS AREA

DO NOT WRITE IN THIS AREA



Question 2 continued

DO NOT WRITE IN THIS AREA

DO NOT WRITE IN THIS AREA

DO NOT WRITE IN THIS AREA

Area with horizontal dotted lines for writing.

(Total for Question 2 is 11 marks)



3 The n th term of an arithmetic series is u_n such that

$$u_n = \ln a + (n - 1) \ln b$$

where a and b are positive integers.

Given that $u_2 = \ln 12$ and that $u_5 = \ln 768$

find the value of a and the value of b .

(7)

DO NOT WRITE IN THIS AREA

DO NOT WRITE IN THIS AREA

DO NOT WRITE IN THIS AREA



Question 3 continued

DO NOT WRITE IN THIS AREA

DO NOT WRITE IN THIS AREA

DO NOT WRITE IN THIS AREA

Area with horizontal dotted lines for writing.

(Total for Question 3 is 7 marks)



P 6 2 2 8 3 A 0 1 1 4 0

Question 4 continued

DO NOT WRITE IN THIS AREA

DO NOT WRITE IN THIS AREA

DO NOT WRITE IN THIS AREA

Area with horizontal dotted lines for writing.

(Total for Question 4 is 6 marks)



P 6 2 2 8 3 A 0 1 3 4 0

- 5 (a) Expand $\sqrt{1-x}$ in ascending powers of x up to and including the term in x^3
Give each coefficient as an exact fraction in its lowest terms. (3)
- (b) Using your expansion with a suitable value of x , obtain an approximation,
to 6 decimal places, of $\sqrt{0.92}$ (3)
- (c) Hence find an approximation, to 5 decimal places, of $\sqrt{23}$ (2)

DO NOT WRITE IN THIS AREA

DO NOT WRITE IN THIS AREA

DO NOT WRITE IN THIS AREA



Question 5 continued

DO NOT WRITE IN THIS AREA

DO NOT WRITE IN THIS AREA

DO NOT WRITE IN THIS AREA

Area with horizontal dotted lines for writing.

(Total for Question 5 is 8 marks)



P 6 2 2 8 3 A 0 1 5 4 0

6 (a) Show that

$$\sin(A + B) + \sin(A - B) = 2\sin A \cos B \quad (2)$$

(b) Hence express $2\sin 7x \cos x$ in the form $\sin mx + \sin nx$ where m and n are integers, giving the value of m and the value of n . (1)

(c) Use calculus to evaluate

$$\int_0^{\frac{\pi}{4}} (6\sin 7x \cos x) dx \quad (4)$$

DO NOT WRITE IN THIS AREA

DO NOT WRITE IN THIS AREA

DO NOT WRITE IN THIS AREA



Question 6 continued

DO NOT WRITE IN THIS AREA

DO NOT WRITE IN THIS AREA

DO NOT WRITE IN THIS AREA

Area with horizontal dotted lines for writing.



Question 6 continued

Area with horizontal dotted lines for writing.

DO NOT WRITE IN THIS AREA

DO NOT WRITE IN THIS AREA

DO NOT WRITE IN THIS AREA



Question 6 continued

DO NOT WRITE IN THIS AREA

DO NOT WRITE IN THIS AREA

DO NOT WRITE IN THIS AREA

Area with horizontal dotted lines for writing.

(Total for Question 6 is 7 marks)



P 6 2 2 8 3 A 0 1 9 4 0

7 The length of each side of a cube S_1 is increasing at a constant rate of 0.1 m/s .

- (a) Find, in m^3/s , the rate of increase of the volume of the cube S_1 when the length of each side of the cube is 2 m . (4)

The total surface area of a different cube S_2 is increasing at a constant rate of $0.05 \text{ m}^2/\text{s}$.

- (b) Find in m^3/s , the rate of increase of the volume of the cube S_2 when the length of each side of the cube is 6 m . (5)

DO NOT WRITE IN THIS AREA

DO NOT WRITE IN THIS AREA

DO NOT WRITE IN THIS AREA



Question 7 continued

DO NOT WRITE IN THIS AREA

DO NOT WRITE IN THIS AREA

DO NOT WRITE IN THIS AREA

Area with horizontal dotted lines for writing.



Question 7 continued

Area with horizontal dotted lines for writing.

DO NOT WRITE IN THIS AREA

DO NOT WRITE IN THIS AREA

DO NOT WRITE IN THIS AREA



Question 7 continued

DO NOT WRITE IN THIS AREA

DO NOT WRITE IN THIS AREA

DO NOT WRITE IN THIS AREA

Area with horizontal dotted lines for writing.

(Total for Question 7 is 9 marks)



8

$$f(x) = 3x^2 - x + 4$$

$$g(x) = x^2 - px + q$$

The roots of the quadratic equation $f(x) = 0$ are α and β

The roots of the quadratic equation $g(x) = 0$ are $\left(\alpha + \frac{1}{\alpha}\right)$ and $\left(\beta + \frac{1}{\beta}\right)$

Without solving the equation $f(x) = 0$

(a) show that $p = \frac{7}{12}$ (3)

(b) Find the value of q (4)

DO NOT WRITE IN THIS AREA

DO NOT WRITE IN THIS AREA

DO NOT WRITE IN THIS AREA



Question 8 continued

DO NOT WRITE IN THIS AREA

DO NOT WRITE IN THIS AREA

DO NOT WRITE IN THIS AREA

Area with horizontal dotted lines for writing.



Question 8 continued

Area with horizontal dotted lines for writing.

DO NOT WRITE IN THIS AREA

DO NOT WRITE IN THIS AREA

DO NOT WRITE IN THIS AREA



Question 8 continued

DO NOT WRITE IN THIS AREA

DO NOT WRITE IN THIS AREA

DO NOT WRITE IN THIS AREA

Area with horizontal dotted lines for writing.

(Total for Question 8 is 7 marks)



P 6 2 2 8 3 A 0 2 7 4 0

9 Showing your working clearly, use algebra to solve the equations

$$\frac{16^x}{8^y} = \frac{1}{4}$$

$$4^x 2^y = 16$$

(7)

DO NOT WRITE IN THIS AREA

DO NOT WRITE IN THIS AREA

DO NOT WRITE IN THIS AREA



Question 9 continued

DO NOT WRITE IN THIS AREA

DO NOT WRITE IN THIS AREA

DO NOT WRITE IN THIS AREA

Area with horizontal dotted lines for writing.

(Total for Question 9 is 7 marks)



P 6 2 2 8 3 A 0 2 9 4 0

10 (a) Solve the equation

$$\sin\left(x + \frac{\pi}{3}\right) = \frac{\sqrt{3}}{2} \quad \text{for } 0 \leq x \leq 2\pi$$

Give your solutions in terms of π , where appropriate.

(3)

(b) Solve the equation

$$3 \sin \theta + 5 \cos \theta = 0 \quad \text{for } -360^\circ \leq \theta \leq 360^\circ$$

Give your solutions to the nearest degree.

(3)

(c) Solve the equation

$$1 + \sin 2y = 2 \cos^2 2y \quad \text{for } -180^\circ \leq y \leq 0^\circ$$

(5)

DO NOT WRITE IN THIS AREA

DO NOT WRITE IN THIS AREA

DO NOT WRITE IN THIS AREA



Question 10 continued

DO NOT WRITE IN THIS AREA

DO NOT WRITE IN THIS AREA

DO NOT WRITE IN THIS AREA

Area with horizontal dotted lines for writing.



Question 10 continued

Area with horizontal dotted lines for writing.

DO NOT WRITE IN THIS AREA

DO NOT WRITE IN THIS AREA

DO NOT WRITE IN THIS AREA



Question 10 continued

DO NOT WRITE IN THIS AREA

DO NOT WRITE IN THIS AREA

DO NOT WRITE IN THIS AREA

Area with horizontal dotted lines for writing.

(Total for Question 10 is 11 marks)



P 6 2 2 8 3 A 0 3 3 4 0

11

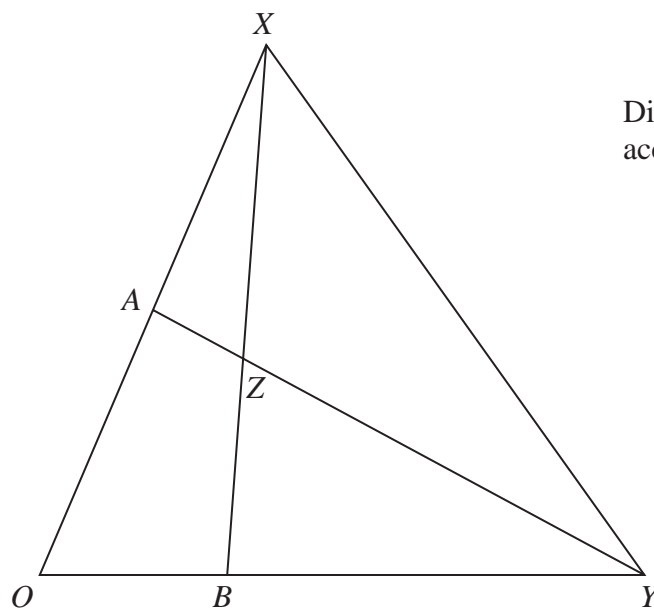
Diagram **NOT**
accurately drawn

Figure 1

Figure 1 shows a triangle OXY

$$\vec{OX} = 2\mathbf{a} \text{ and } \vec{OY} = 3\mathbf{b}$$

A is the midpoint of OX and B is the point on OY such that $OB : BY = 1 : 2$
The lines XB and AY intersect at Z .

(a) Find \vec{AB} as a simplified expression in terms of \mathbf{a} and \mathbf{b} (1)

(b) Using a vector method, find \vec{OZ} as a simplified expression in terms of \mathbf{a} and \mathbf{b} (9)

The point M on XY is such that O, Z and M are collinear.

(c) Find \vec{OM} as a simplified expression in terms of \mathbf{a} and \mathbf{b} (3)



Question 11 continued

DO NOT WRITE IN THIS AREA

DO NOT WRITE IN THIS AREA

DO NOT WRITE IN THIS AREA

Area with horizontal dotted lines for writing.



Question 11 continued

Area with horizontal dotted lines for writing.

DO NOT WRITE IN THIS AREA

DO NOT WRITE IN THIS AREA

DO NOT WRITE IN THIS AREA



Question 11 continued

DO NOT WRITE IN THIS AREA

DO NOT WRITE IN THIS AREA

DO NOT WRITE IN THIS AREA

Area with horizontal dotted lines for writing.

(Total for Question 11 is 13 marks)



P 6 2 2 8 3 A 0 3 7 4 0

12

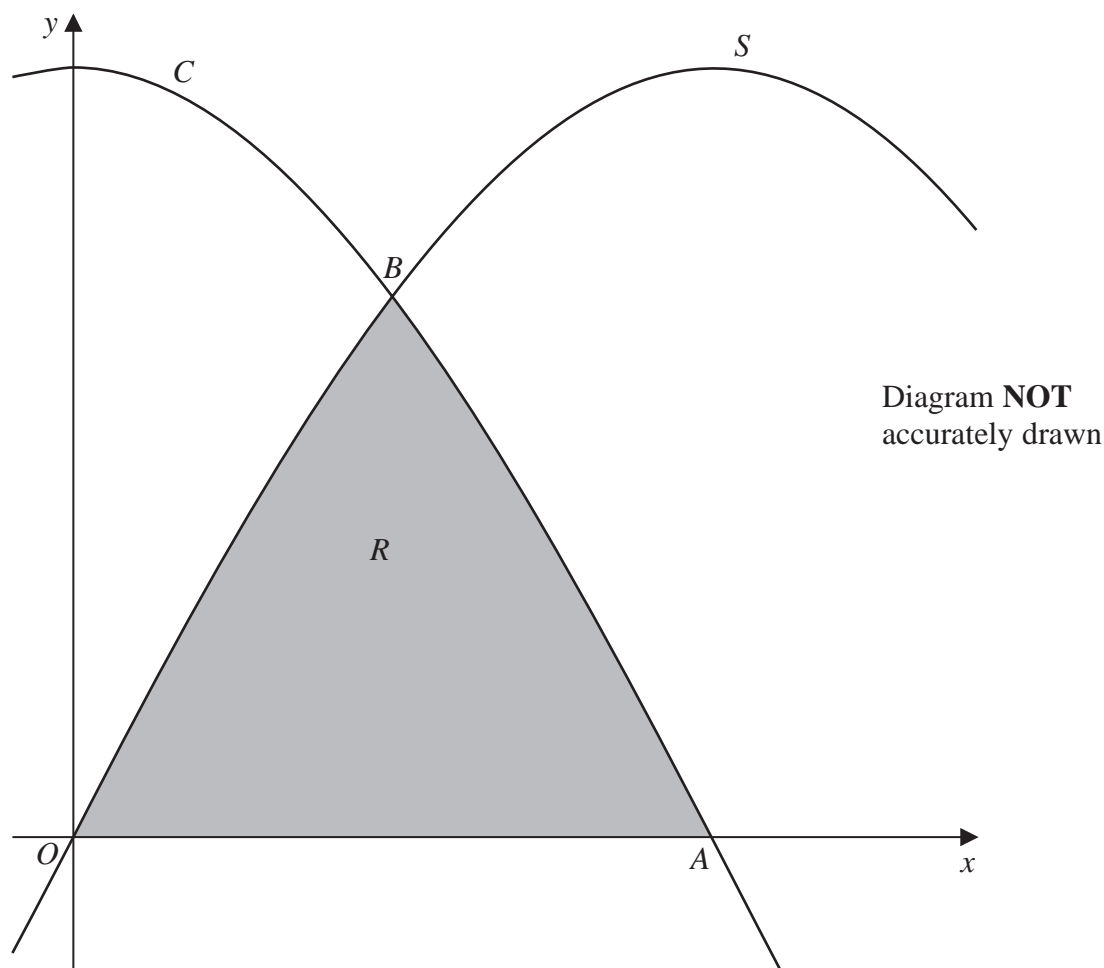


Figure 2

The region R , shown shaded in Figure 2, is bounded by the x -axis, the curve S with equation $y = 2\sin x$ and the curve C with equation $y = 2\cos x$. As shown in Figure 2, C crosses the x -axis at the point A .

(a) Write down the x coordinate of A .

(1)

As shown in Figure 2, C and S intersect at the point B .

(b) Find the x coordinate of B .

(2)

(c) Using calculus, find the area of the shaded region R .

Give your answer in the form $a - \sqrt{b}$ where a and b are integers.

(4)

DO NOT WRITE IN THIS AREA

DO NOT WRITE IN THIS AREA

DO NOT WRITE IN THIS AREA



Question 12 continued

DO NOT WRITE IN THIS AREA

DO NOT WRITE IN THIS AREA

DO NOT WRITE IN THIS AREA

Area with horizontal dotted lines for writing.



Question 12 continued

Area with horizontal dotted lines for writing.

DO NOT WRITE IN THIS AREA

DO NOT WRITE IN THIS AREA

DO NOT WRITE IN THIS AREA

(Total for Question 12 is 7 marks)

TOTAL FOR PAPER IS 100 MARKS

