

Write your name here	
Surname	Other names
Edexcel	Centre Number
International GCSE	Candidate Number
<h1 style="margin: 0;">Further Pure Mathematics</h1> <h2 style="margin: 0;">Paper 1</h2>	
Thursday 17 January 2013 – Morning	Paper Reference
Time: 2 hours	4PM0/01
Calculators may be used.	Total Marks

Instructions

- Use **black** ink or ball-point pen.
- **Fill in the boxes** at the top of this page with your name, centre number and candidate number.
- Answer **all** questions.
- Without sufficient working, correct answers may be awarded no marks.
- Answer the questions in the spaces provided
– *there may be more space than you need.*

Information

- The total mark for this paper is 100.
- The marks for **each** question are shown in brackets
– *use this as a guide as to how much time to spend on each question.*

Advice

- Read each question carefully before you start to answer it.
- Check your answers if you have time at the end.

Turn over ►

P42038A

©2013 Pearson Education Ltd.

6/5/6/5/



PEARSON

Answer all ELEVEN questions.

Write your answers in the spaces provided.

You must write down all stages in your working.

1 (a) On the axes below sketch the lines with equations

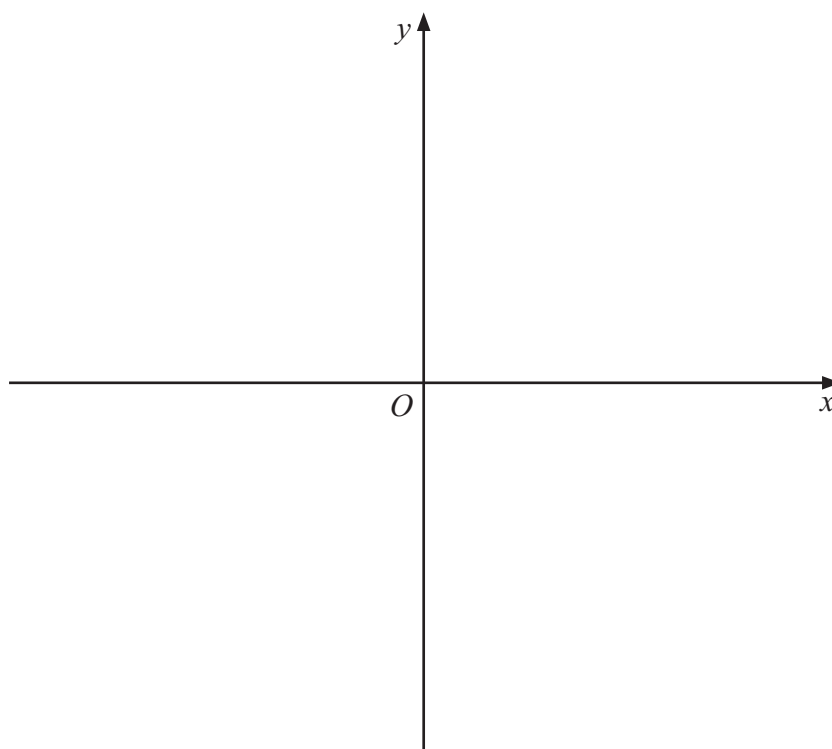
(i) $y = 8$ (ii) $y + x = 6$ (iii) $y = 3x - 4$

Show the coordinates of the points where each line crosses the coordinate axes.

(3)

(b) Show, by shading, the region R which satisfies $y \geq 3x - 4$, $y + x \geq 6$, $x \geq 0$ and $y \leq 8$

(1)



(Total for Question 1 is 4 marks)



6

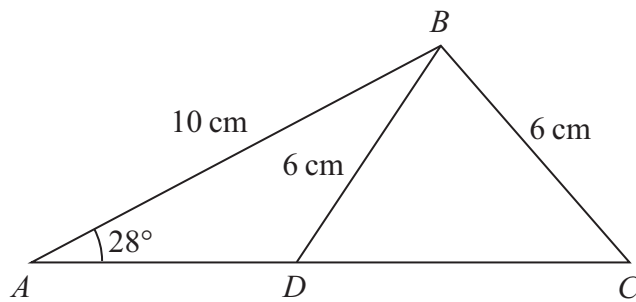


Diagram **NOT**
accurately drawn

Figure 1

Figure 1 shows triangle ABC with $AB = 10$ cm, $BC = 6$ cm and $\angle BAC = 28^\circ$. The point D lies on AC such that $BD = 6$ cm.

- (a) Find, to the nearest 0.1° , the size of $\angle DBC$. (4)
- (b) Find, to 3 significant figures, the length of AD . (3)
- (c) Find, to 3 significant figures, the area of triangle ABC . (3)



11

$$f(x) = x^3 + px^2 + qx + 6 \quad p, q \in \mathbb{Z}$$

Given that $f(x) = (x - 1)(x - 3)(x + r)$

(a) find the value of r .

(1)

Hence, or otherwise,

(b) find the value of p and the value of q .

(3)

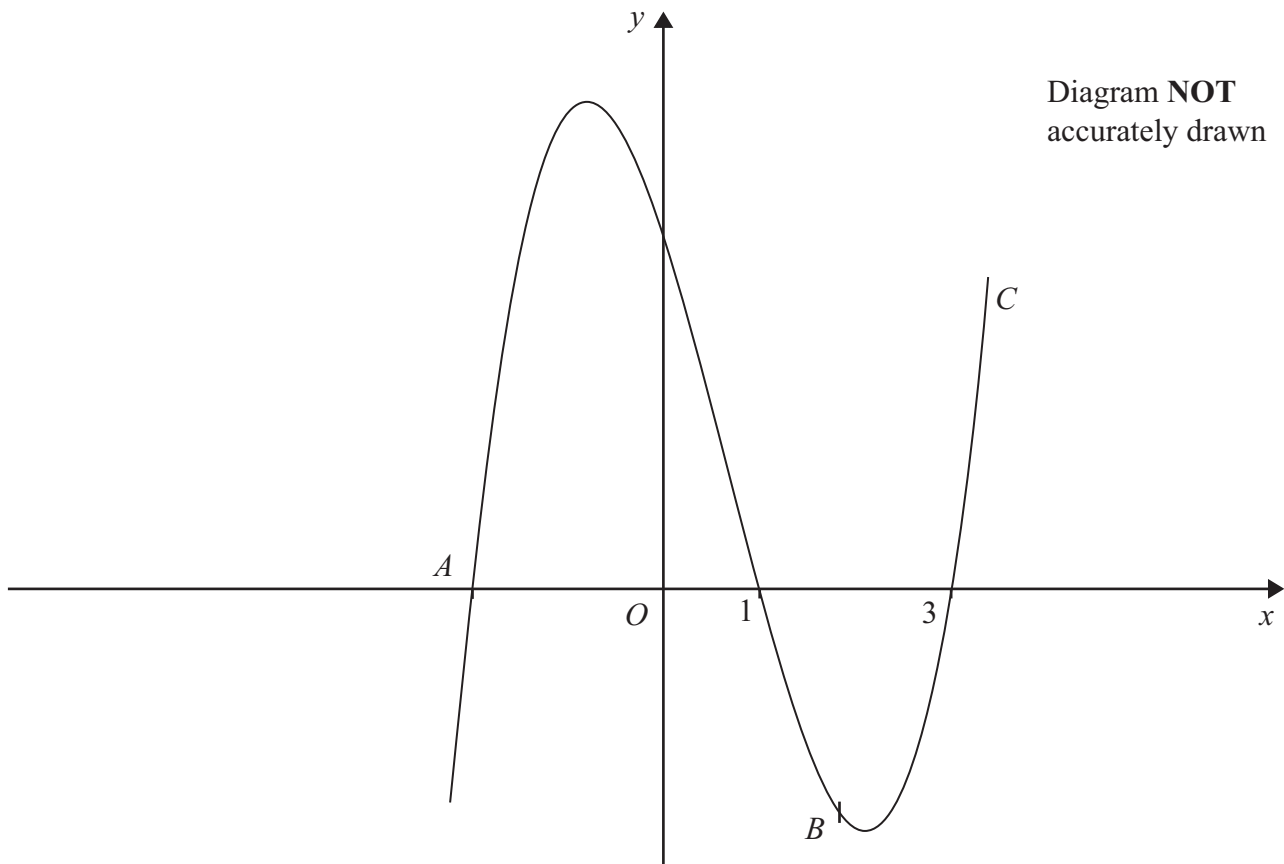


Figure 2

Figure 2 shows the curve C with equation $y = f(x)$ which crosses the x -axis at the points with coordinates $(3, 0)$ and $(1, 0)$ and at the point A . The point B on C has x -coordinate 2

(c) Find an equation of the tangent to C at B .

(5)

(d) Show that the tangent at B passes through A .

(2)

(e) Use calculus to find the area of the finite region bounded by C and the tangent at B .

(5)



